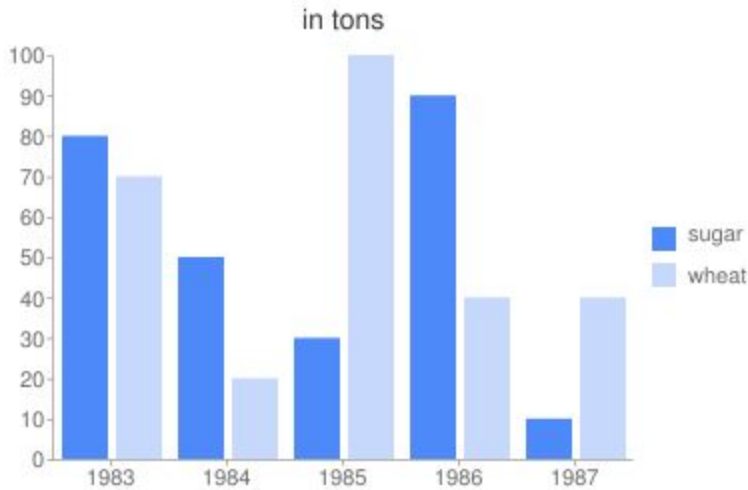


# Data Handling

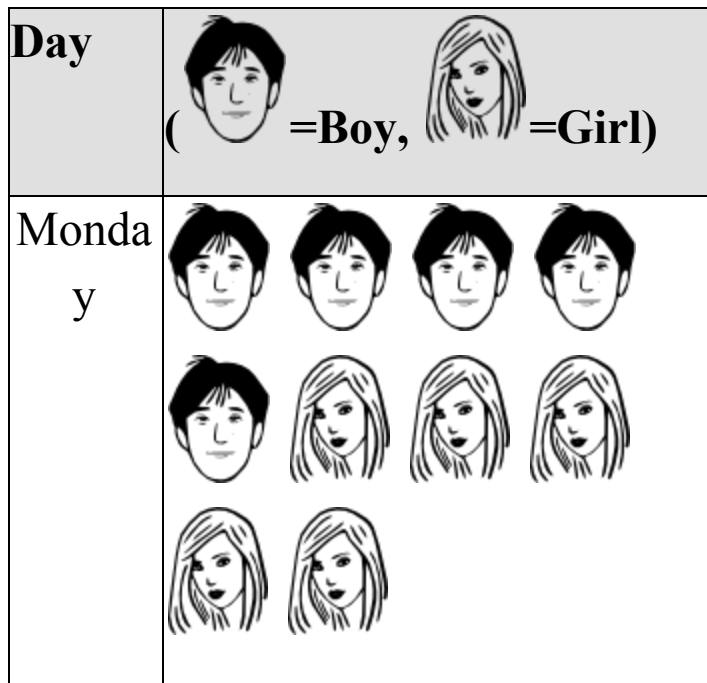
1) The following bar chart shows the amount of sugar and wheat produced (in tons) in Gujarat from 1983 to 1987.



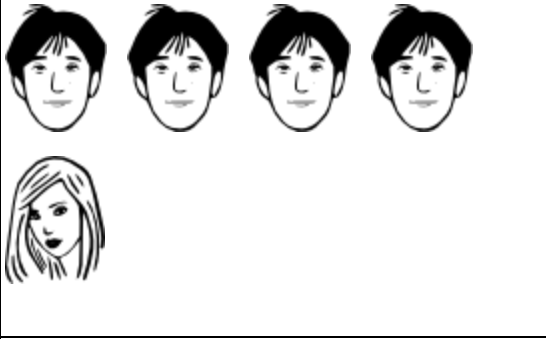




Find the year when

- The total production of sugar and wheat was maximum.
- The total production of sugar and wheat was minimum.

2) The following pictograph shows the number of students who were absent in class during last week.



Tuesday	
Wednesday	
Thursday	
Friday	
Saturday	

From this we see that

- The maximum number of students were absent on
- The total number of boy absentees in that week was
- The total number of girl absentees in that week was

3) Make a circle graph to show the number of votes received in the election of the class monitor.

Mona	6 votes
Payal	10 votes
Prashant	2 votes
Sona	20 votes
Rajen	15 votes
Mira	4 votes
Shubash	3 votes

4)A group of 360 people were asked to vote for their favourite season from the three seasons rainy, winter and summer.

Seasons	No.of votes
Summer	90
Rainy	120
Winter	150

- (i) Which season got the most votes?
- (ii) Find the central angle of each sector.
- (iii) Draw a pie chart to show this information.

**References:**<https://brainly.in>

<https://www.ck12.org>