





Integers - MCQ

Sheet 1

- 1) Which integer is greater than -5 ?
- a) -7 b) -1 c) -9 d) -11
- 2) How many integers are there between -8 and 2 ?
- a) 7 b) 4 c) 0 d) 9
- 3) What is the opposite value of the integer 6 ?
- a) -6 b) 5 c) 6 d) -4
- 4) Identify the integer that is less than -3 .
- a) 0 b) -1 c) -4 d) 2
- 5) Which of the following integers is greater than -1 and lesser than 7 ?
- a) -9 b) 5 c) -5 d) 8
- 6) How many pairs of opposite integers are there between -4 and 5 ?
- a) 3 b) 8 c) 2 d) 6
- 7) The following data shows the changes in temperatures across various cities from morning to noon. Which city recorded the maximum temperature?
- a)  20°C
Atlanta
- b)  13°C
Chicago
- c)  12°C
Boston
- d)  25°C
Houston